




யா/ ஹாட்லிக் கல்லூரி, பருத்தித்துறை.

J/ Hartley College, Point Pedro.



முதலாம் தவணைப் பரீட்சை – 2020 – தரம் 7
First Term Examination – 2020 – Grade 7

புவியியல் I, II
Civic Education I, II

22

T

I, II

இரண்டு மணித்தியாலம்
Two Hours

சுட்டெண்
Index No

| | | | | |
|--|--|--|--|--|
| | | | | |
|--|--|--|--|--|

Geography

Part – I

Underline the correct answer.

- 1) What is the planet considered as a marvellous creation of nature and consists of a congenial environment for living things.
1. Mercury 2. Venus 3. Earth 4. Neptune
- 2) What is the equatorial circumference of the earth?
1. 12757Km 2. 12714Km 3. 40077km 4. 39943km
- 3) The number of lines on the globe running from North to South.
1. 360 2. 361 3. 05 4. 181
- 4) The line on the globe which is called the 'North pole' is,
1. 0° equator 3. $66\frac{1}{2}^{\circ}$ North latitude
2. 90° North latitude 4. 90° South latitude
- 5) What is the continent located to the southern half of the globe?
1. North America 2. Australia 3. Europe 4. Asia
- 6) Which of the following to be considered a city located at 80° East longitude of the globe?
1. New York 2. London 3. Tokoyo 4. Colombo
- 7) The largest and smallest continents in terms of land area respectively,
1. Asia, Australia 3. Asia, Europe
2. Australia, Asia 4. Asia, Africa
- 8) Which of the following to be considered a continent as well as a country?
1. Africa 3. Australia
2. Asia 4. South America
- 9) What is the continent located on the Western longitudes?
1. Asia 3. Europe
2. Africa 4. South America

10) What is the area of the Indian Ocean?

1. 156 mkm^2 2. 77 mkm^2 3. 69 mkm^2 4. 20 mkm^2

11) Which of the following Islands is located outside the Indian Ocean?

1. Madagascar 2. Sumatra 3. Caribbean 4. Sri Lankan

12) Which of the following seas is not surrounded by land?

1. Baltic 3. Caspian
2. Black 4. Aral

13) Which of the following is not considered a water body?

1. Continent 3. Peninsula
2. Ocean 4. Island

14) The smallest ocean is ,

1. Indian 3. Atlantic
2. Antarctic 4. Arctic

15) The length of Sri Lanka.

1. Point Pedro – Dondra Head 3. Colombo – Dondra Head
2. Point Pedro – Colombo 4. Colombo – Sankamankanda

16) The ocean located to the South of Sri Lanka is,

1. Indian 3. Atlantic
2. Arctic 4. Pacific

17) How many nautical miles does the territorial sea limit of a country have?

1. 12 Km 3. 510 Km
2. 12 nautical miles 4. 16 nautical miles

18) What is the relief feature that can be seen in the interior plain?

1. Bay 3. Residual hill
2. Peninsula 4. Point

19) What is the lagoon located to the East of Sri Lanka?

1. Puttalam 3. Batticaloa
2. Negombo 4. Jaffna

20) Which of the following is the natural tangible heritage?

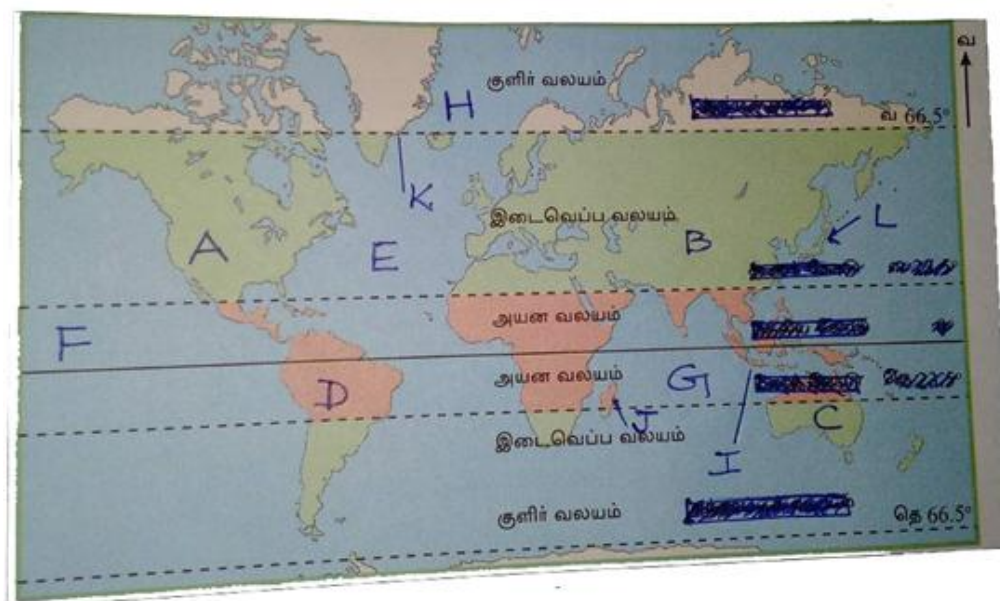
1. Sri Mahabodhi 3. Sigiriya
2. Namal Uyana 4. Ranmasu Uyana

(20 × 2 = 40 Marks)

Part – II

Answer all questions.

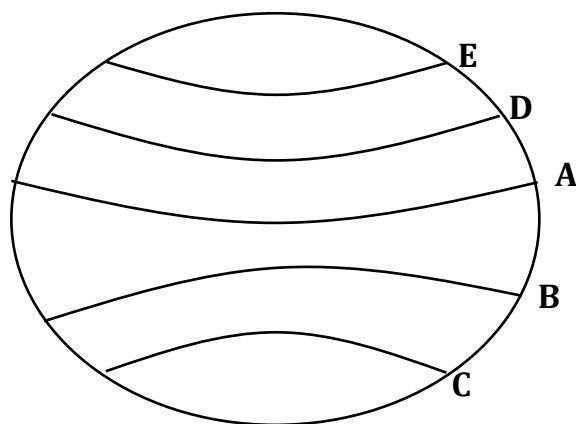
1) Using the world map given, answer the following questions.



1. Write the names of the continent marked by letters A, B, C, D
2. Write the names of oceans denoted by letters E, F, G, H
3. Mention the Islands marked by letters I, J, K, L

(4 + 4 + 4 = 12))

2)



1. Write the names of the latitudes marked by letters A, B, C, D, E
2. Write the names of the latitudes mentioned by the following degrees.
A – 0°
B – 180°
3. Write two uses each of latitudes and longitudes.

(5 + 2 + 5 = 12)

3)

1. Differentiate rotation and revolution.
2. Explain briefly about the results of revolution.
3. Mention four evidences that can be given to prove that the earth is globe in shape.

(4 + 4 + 4 = 12)

4)

1. Explain the following
 - A. Continent
 - B. Ocean
 - C. Island

(2 × 3 = 6)

2. Write three any seas located within the land area.
3. Mention three any Asian countries that are politically divided.

(3 + 3 = 6)

5)

1. Write the specific location of Sri Lanka.
2. Explain how the location of Sri Lanka influences on climate.
3. Write four intangible heritages that cannot be seen physically through human behaviours but revealed.

(4 + 4 + 4 = 12)